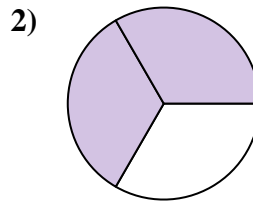
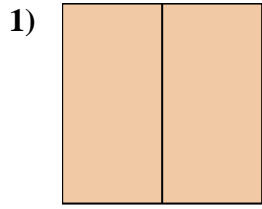
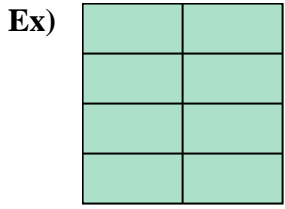




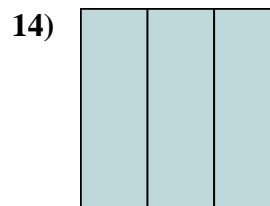
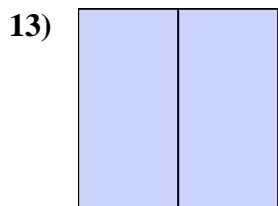
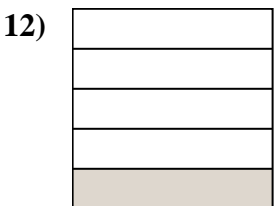
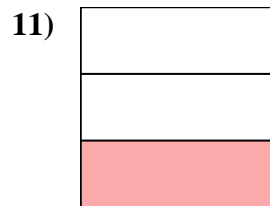
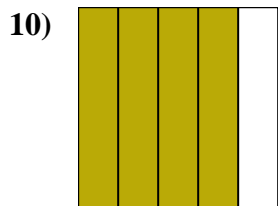
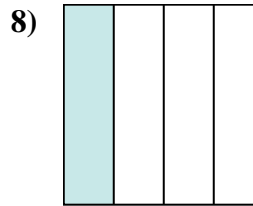
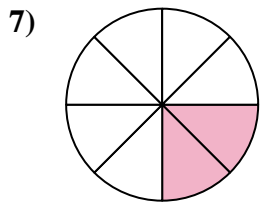
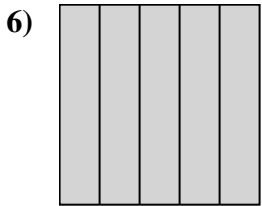
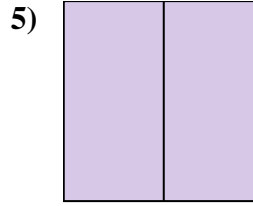
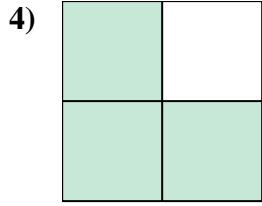
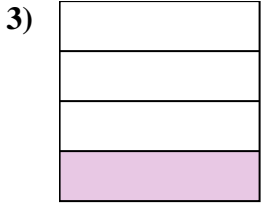
Write the shaded amount as a fraction.



Answers

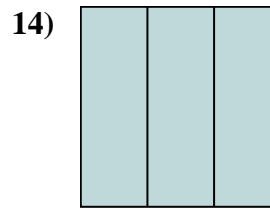
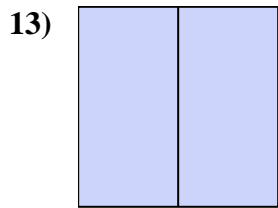
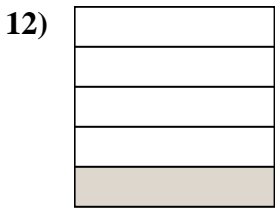
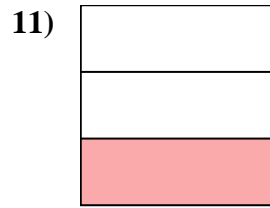
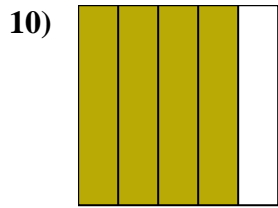
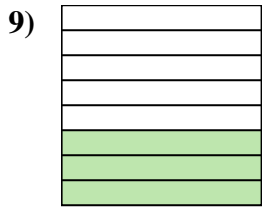
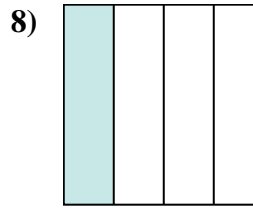
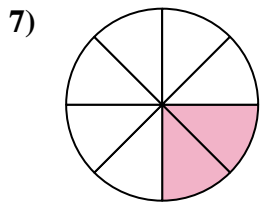
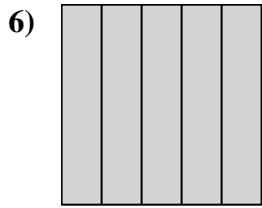
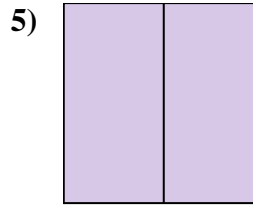
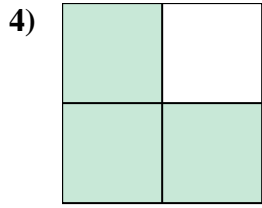
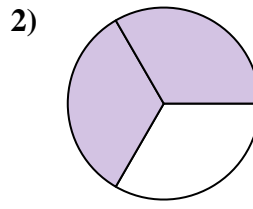
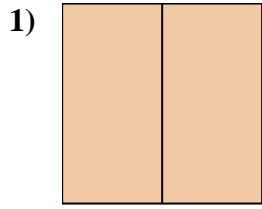
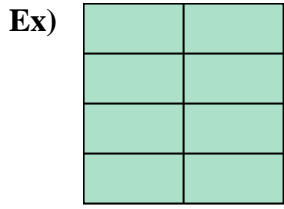
Ex. $\frac{8}{8}$

- 1. _____
- 2. _____
- 3. _____
- 4. _____
- 5. _____
- 6. _____
- 7. _____
- 8. _____
- 9. _____
- 10. _____
- 11. _____
- 12. _____
- 13. _____
- 14. _____





Write the shaded amount as a fraction.



Answers

Ex. 8/8

1. 2/2

2. 2/3

3. 1/4

4. 3/4

5. 2/2

6. 5/5

7. 2/8

8. 1/4

9. 3/8

10. 4/5

11. 1/3

12. 1/5

13. 2/2

14. 3/3